



Day 2

Use a friendly number to solve the problem.
Draw your answer on the number line.


1. $65 + 10 = \underline{\quad}$



2. $65 + 18 = \underline{\quad}$



3. $44 + 20 = \underline{\quad}$



4. $44 + 29 = \underline{\quad}$



5. $54 + 29 = \underline{\quad}$



6. $29 + 59 = \underline{\quad}$



Permission is granted for limited reproduction of pages for in-home use and not for resale.