











Find the length, width, and perimeter of each shape shown below.

<p>Length = ____ units</p> <p>Width = ____ units</p> <p>Perimeter = ____ units</p> 	<p>Length = ____ units</p> <p>Width = ____ units</p> <p>Perimeter = ____ units</p> 
<p>Length = ____ units</p> <p>Width = ____ units</p> <p>Perimeter = ____ units</p> 	<p>Length = ____ units</p> <p>Width = ____ units</p> <p>Perimeter = ____ units</p> 
<p>Length = ____ units</p> <p>Width = ____ units</p> <p>Perimeter = ____ units</p>  <p style="text-align: center;">20</p>	<p>Length = ____ units</p> <p>Width = ____ units</p> <p>Perimeter = ____ units</p>  <p style="text-align: center;">10</p>
<p>Length = ____ units</p> <p>Width = ____ units</p> <p>Perimeter = ____ units</p>  <p style="text-align: center;">6</p>	<p>Length = ____ units</p> <p>Width = ____ units</p> <p>Perimeter = ____ units</p>  <p style="text-align: center;">13</p>