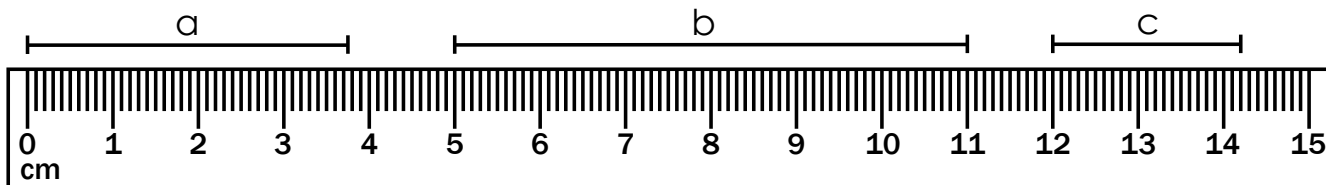


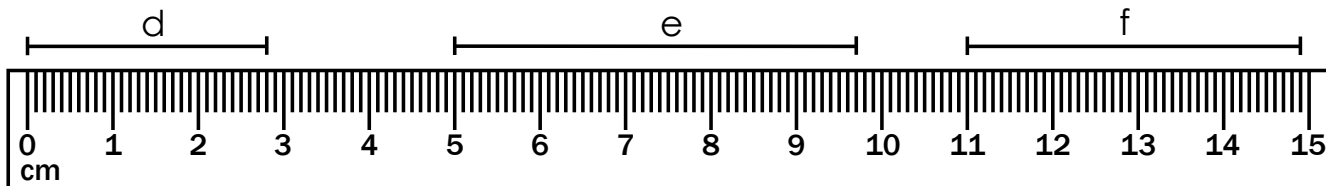
Name: \_\_\_\_\_

# Centimeter Line Segments

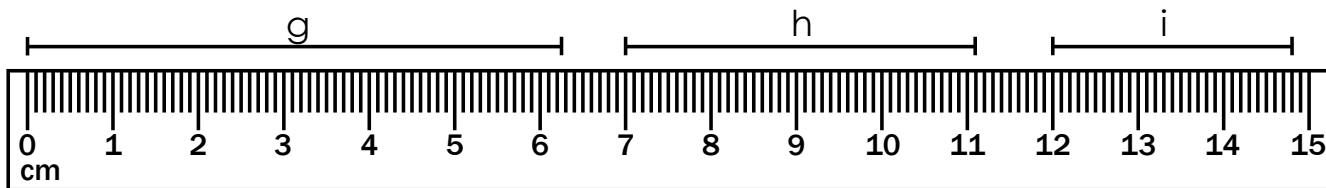
Measure each line segment using the ruler shown. Round to the nearest centimeter.



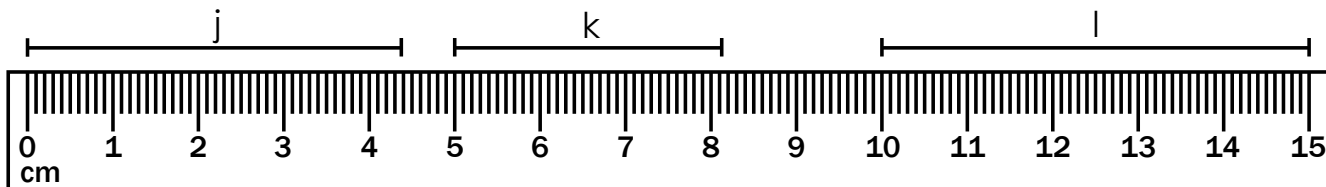
a = \_\_\_\_\_ b = \_\_\_\_\_ c = \_\_\_\_\_



d = \_\_\_\_\_ e = \_\_\_\_\_ f = \_\_\_\_\_



g = \_\_\_\_\_ h = \_\_\_\_\_ i = \_\_\_\_\_



j = \_\_\_\_\_ k = \_\_\_\_\_ l = \_\_\_\_\_