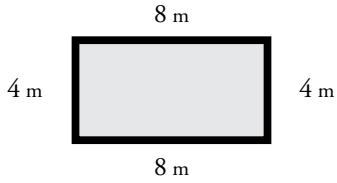


Name: _____

Perimeter

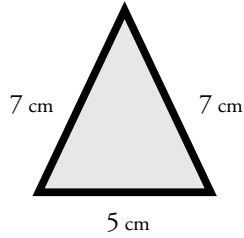
Find the perimeter of each polygon.

a.



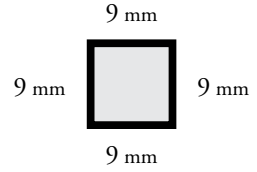
Perimeter = _____

b.



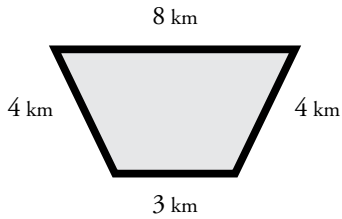
Perimeter = _____

c.



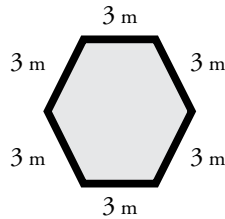
Perimeter = _____

d.



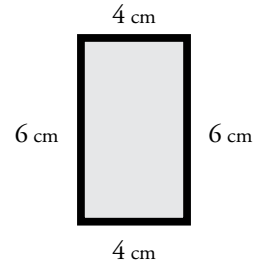
Perimeter = _____

e.



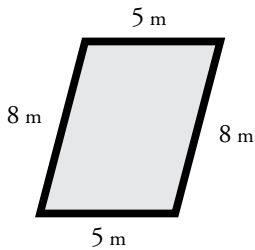
Perimeter = _____

f.



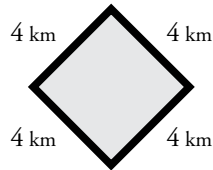
Perimeter = _____

g.



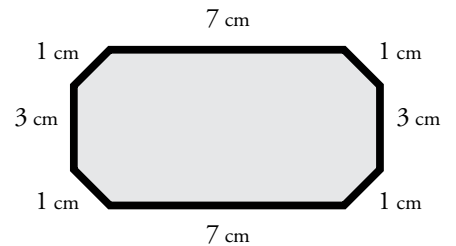
Perimeter = _____

h.



Perimeter = _____

i.



Perimeter = _____

Bonus Box: Write the names of the polygons pictured above.